

Australia

Map Set

- 1 Urban areas / Cities & States/Territories/Areas
- 2 Highland areas/Mountains
- 3 Average Daily Maximum Temperature (annual) and deserts
- 4 Areas with high rainfall
- 5 Climate Zones
- 6 Coral reefs
- 7 Bushfire areas
- 8 Cyclone areas
- 9 Major rivers and bodies of water
- 10 Coal mining
- 11 Iron Ore mining
- 12 Gold mining
- 13 Copper mining
- 14 Aluminium mining (bauxite)
- 15 Sheep farming
- 16 Cattle farming
- 17 Wheat growing
- 18 Poultry Farms and Processing
- 19 Sugarcane growing
- 20 Fruit and Vegetable growing

- 21 Blank Map



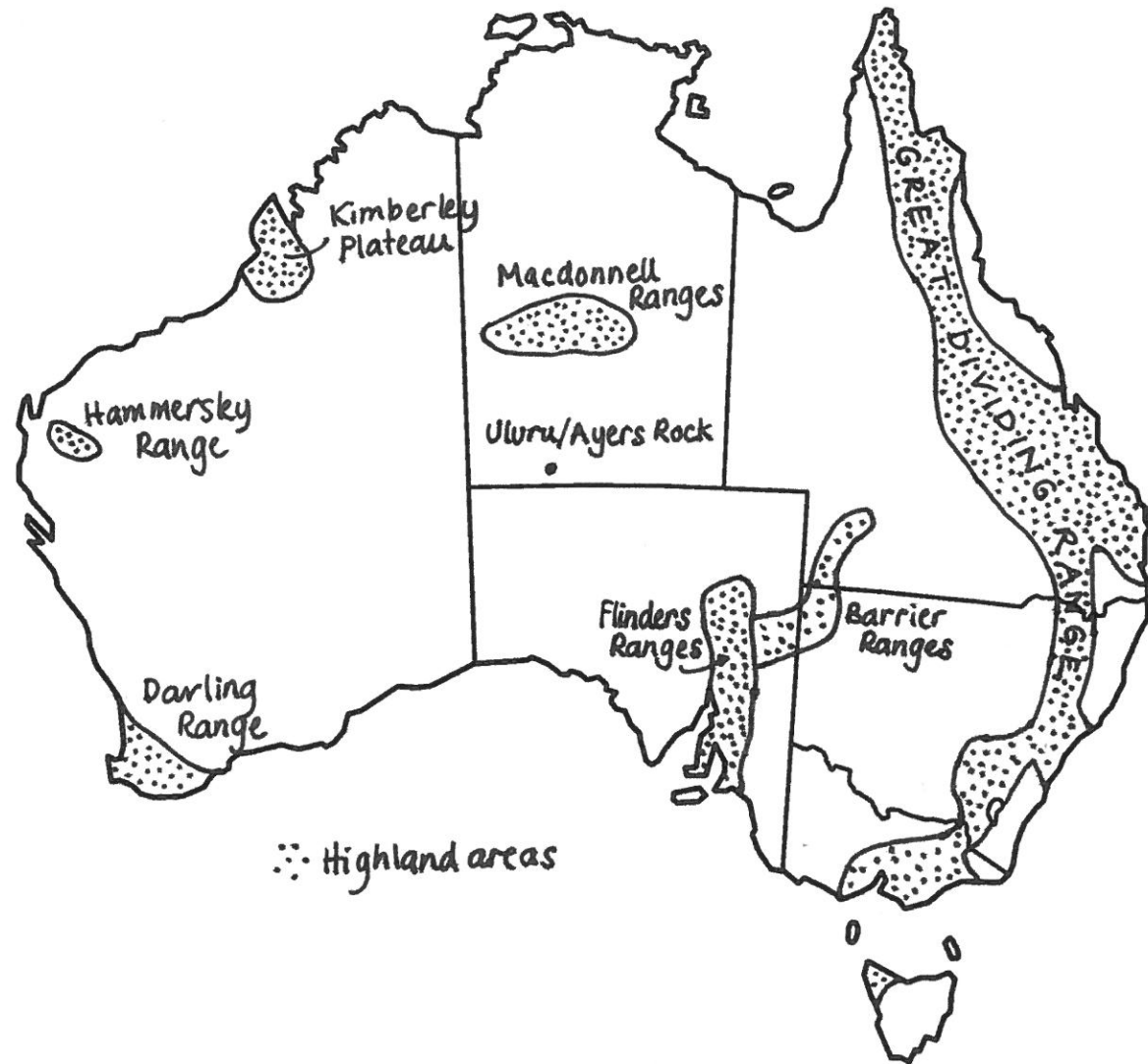
Map 1

States and Urban Areas

Questions and notes

1. Are cities near copper mines? Why or why not? (See map 13)
2. Are there any bushfires near main cities? (See map 7)
3. Are poultry farms (chicken farms) near cities? (See map 18)

_____ 300km ^North



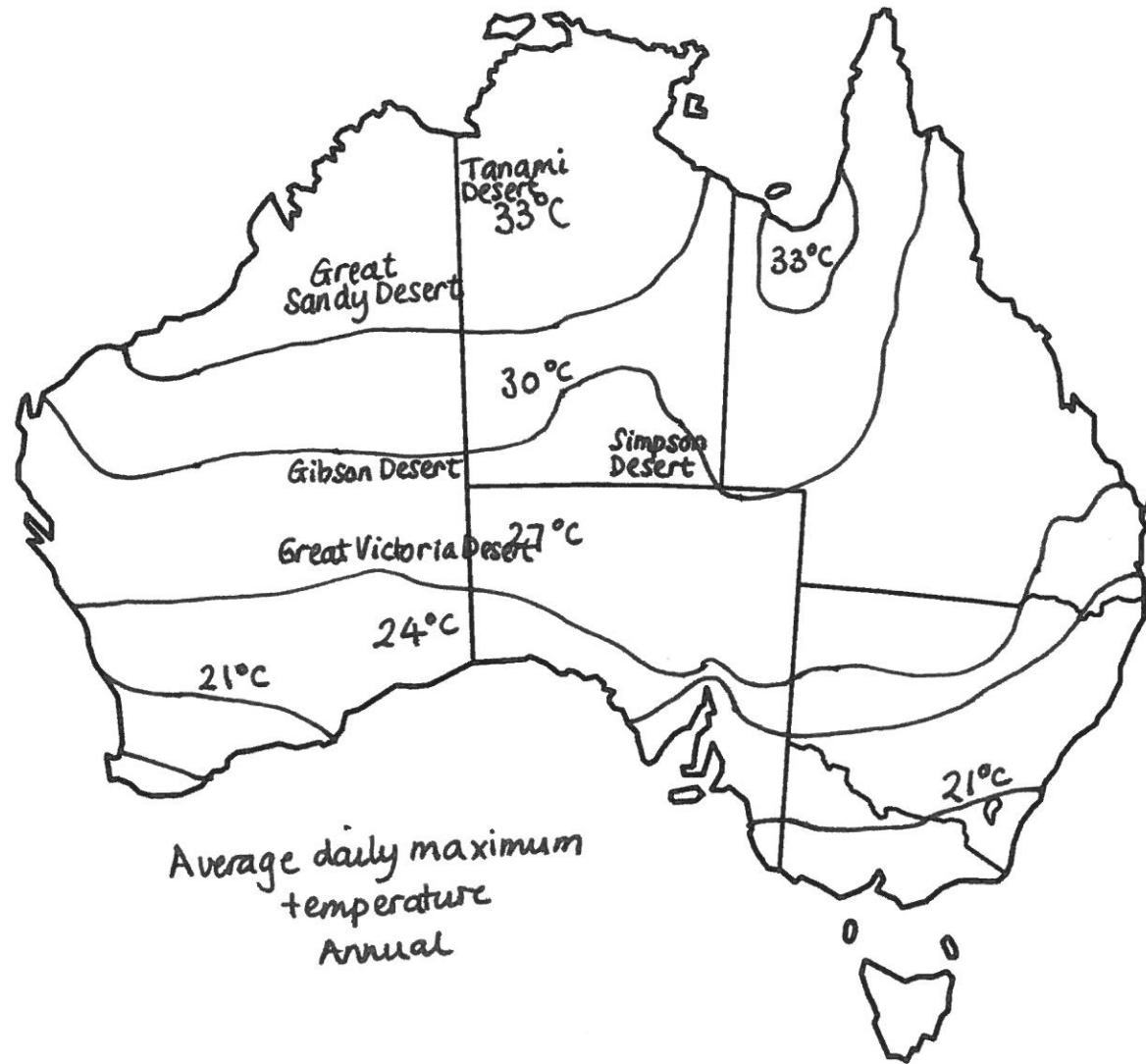
Map 2

High Land/Mountains

Questions and notes

1. Is there high rainfall in areas where there is high ground?
(See map 4)
2. Are there many cattle where there is high ground? (See map 16)
3. Do rivers flow over high ground? (See map 8)

_____ 300km ^North



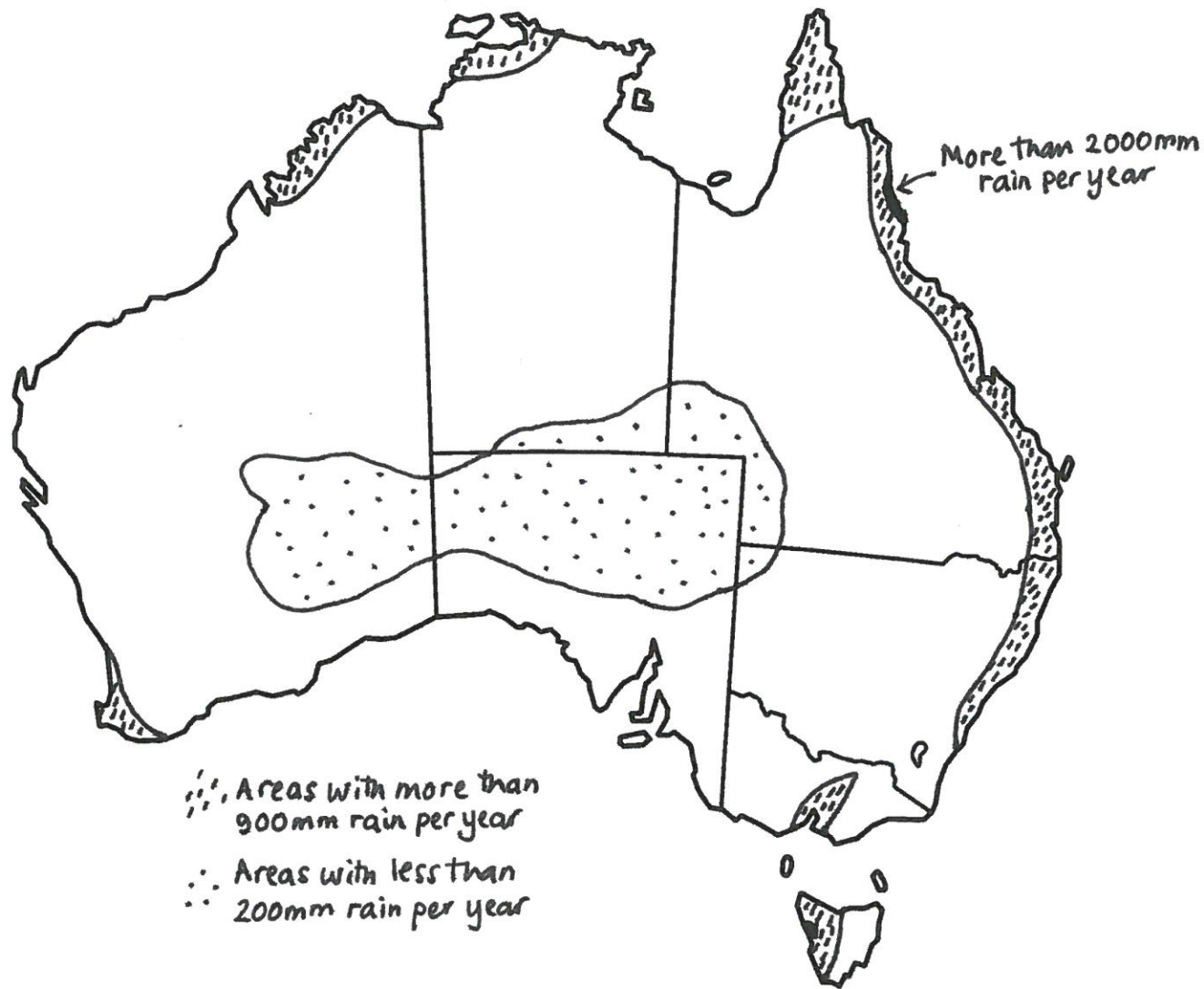
Map 3

High temperatures

Questions and notes

1. Are there main cities in the hottest part of the country? (See map 1)
2. Are Iron ore mines in the hottest parts of the country? (See map 11)
3. Are the coral reefs in warm places? (See map 6)

_____ 300km ^North

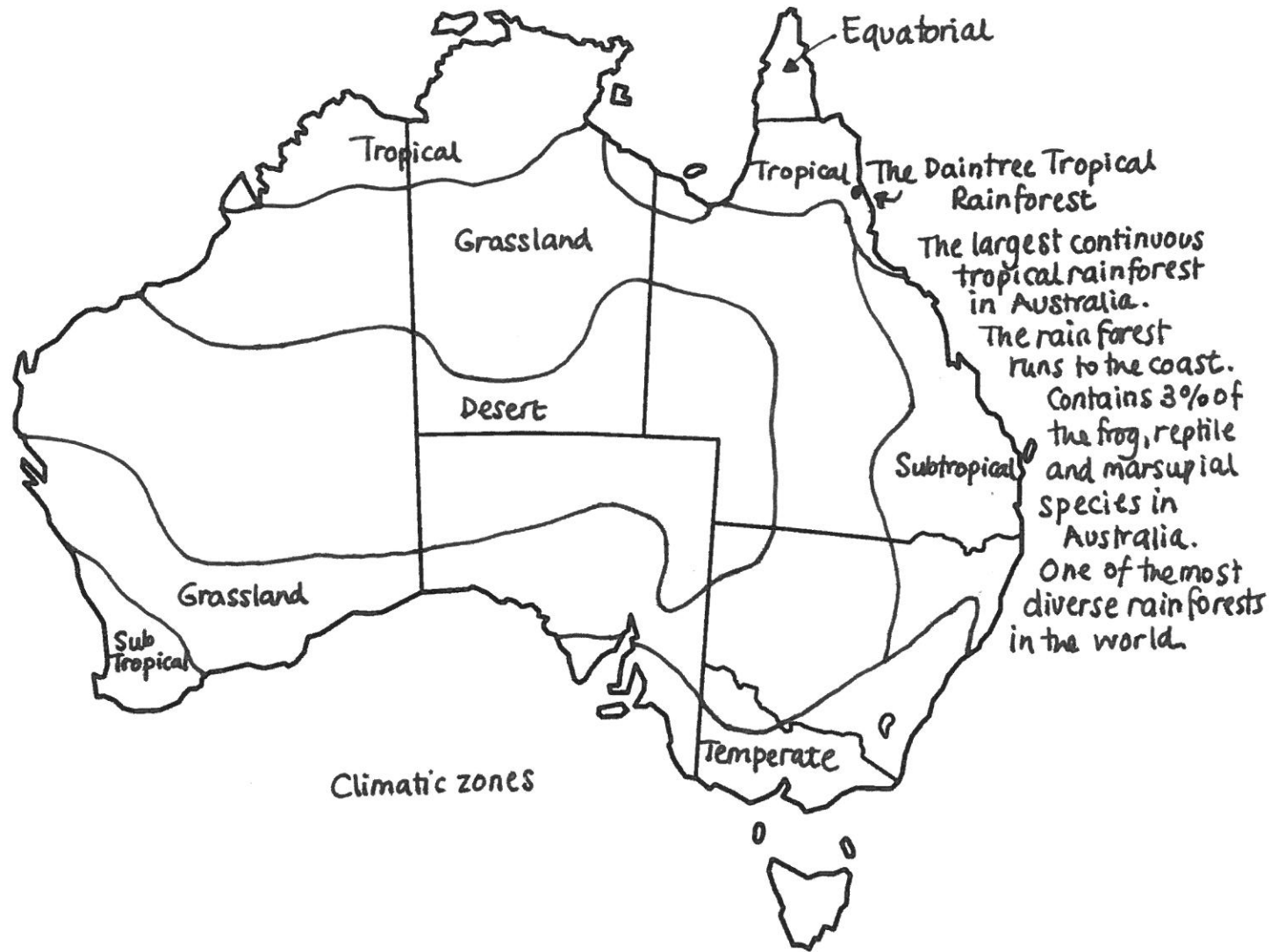


Map 4

High Rainfall

Questions and notes

1. Are wheat farms in high rainfall areas? (See map 17)
2. What climate zones are in high rainfall areas? (See map 5)
3. Are fruit and vegetable farms in high rainfall areas? (See map 20)



Map 5

Climate Zones

Questions and notes

1. What climate zones are sheep farms in? (See map 15)
2. What climate zones are bushfires in? (See map 7)
3. What climate zones are coal mines in? (See map 10)

_____ 300km ^North

Map 6

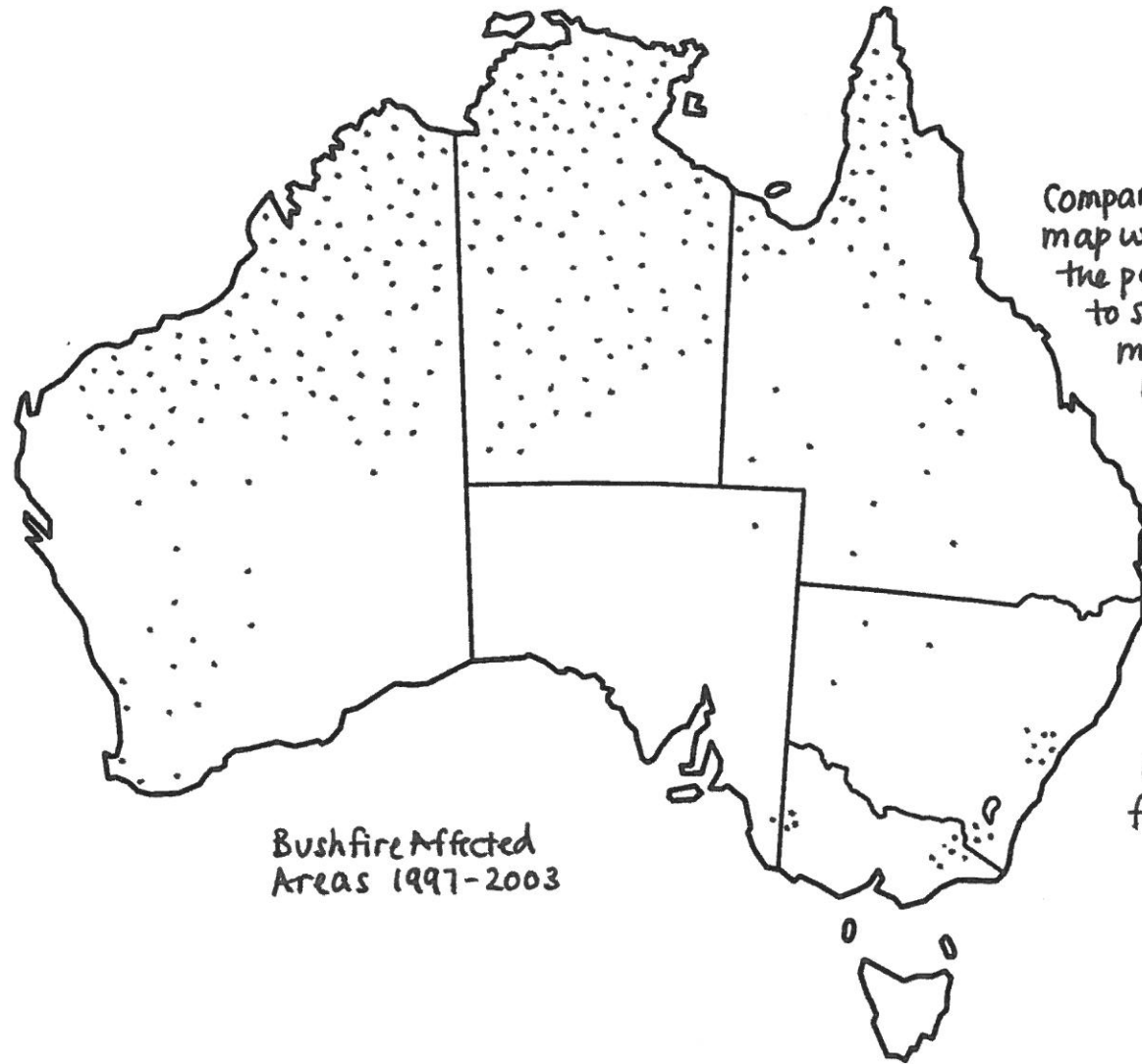
Coral Reefs

Questions and notes

1. Which part of the country are the main reefs in?
2. Are coal mines near reefs? (See map 5)
3. Are there major cities near the Great Barrier Reef? (See map 1)

_____ 300km ^North





Compare this map with the population map to see where most people might be affected

Many fires occur where there are few people. Some fires occur in important rural and farming areas.

Bushfire Affected Areas 1997-2003

Map 7

Bushfire Areas

Questions and notes

1. Are bushfires in areas where there is wheat growing? (See map 4)
2. Are bushfire areas near cyclone areas? (See map 8)
3. Are there bushfire areas in sheep farm areas? (See map 15)

_____ 300km ^North

Map 8

Cyclone (Storm) Areas

Questions and notes

1. Do cyclones occur in the North or the South?
2. Are chicken farms in cyclone areas? (See map 18)
3. Are reef areas in cyclone areas? (See map 6)

_____ 300km ^North





Map 9

Waterways and Rivers

Questions and notes

1. Which big cities are by the coast?
2. Are sugarcane farms near the coast? (See map 19)
3. Is there much crop farming near major rivers? (See map 20)

Bodies of water

_____ 300km ^North

Map 10

Coal Mining

Questions and notes

1. Where in the country can coal mines be found?
2. Are coal mines near high land? (See map 2)
3. Are coal mines near gold mines? (See map 12)

_____ 300km ^North



Map 11

Iron Ore Mining

Questions and notes

1. Where in the country are iron ore mines?
2. Are iron ore mines in the same areas as copper mines? (See map 10)
3. Are iron ore mines in high land? (See map 2)

_____ 300km ^North



Map 12

Gold Mining

Questions and notes

1. Are there gold mines near major rivers? (See map 9)
2. Are gold mines near sugar cane farms? (See map 19)
3. Are gold mines near copper mines? (See map 13)

_____ 300km ^North





Map 13

Copper Mining

Questions and notes

1. Where in the country are copper mines?
2. Are copper mines near to main cities? (See map 1)
3. Are copper mines in areas where wheat is grown? (See map 17)

_____ 300km ^North

Map 14

Aluminium (Bauxite) Mining

Questions and notes

1. Where in the country are bauxite mines?
2. Are bauxite mines in areas where there is a lot of rain? (See map 3)
3. Are bauxite mines near other mines (See map 11, 12 or 13)

_____ 300km ^North





Map 15

Sheep farming

Questions and notes

1. Does the biggest state have the most sheep?
2. Are sheep farms in areas where there are reefs? (See map 6)
3. Which state has the most sheep?

_____ 300km ^North

Map 16

Cattle farming

Questions and notes

1. Does the biggest state have the most cattle?
2. Does the state with the most cattle also have the most sheep?
3. Is the area with the most cattle also rich with wheat farming?
(See map 17)

_____ 300km ^North



Map 17

Wheat growing

Questions and notes

1. Is wheat growing done near the coast?
2. Is wheat growing done in the same places as sugarcane? (See map 19)
3. Is wheat growing done in areas where there are big rivers? (See map 12)

_____300km ^North



Map 18

Poultry/Chicken Farming

Questions and notes

1. Are chicken farms near big cities? (See map 1)
2. Are chicken farms in cyclone areas? (See map 8)
3. Are chicken farms in areas where there are many cattle farms? (See map 16)

_____ 300km ^North





Map 19

Sugarcane growing

Questions and notes

1. Which climate zone are sugar cane farms in ?
(See map 5)
2. Are sugar cane farms near big cities? (See map 1)
3. Is sugar cane grown in states with lots of cattle? (See map 16)

_____ 300km ^North



Map 20

Fruit and Vegetable Farms

Questions and notes

1. Where are fruit and vegetable farms found?
2. Are fruits and vegetables grown near the coast?
3. Are fruits and vegetables grown near chicken farms? (See map 18)

